



Use subtraction to solve the following problems.

**Answers**

$$\begin{array}{r} 1) \quad 802 \\ - 126 \\ \hline \end{array}$$

$$\begin{array}{r} 2) \quad 501 \\ - 202 \\ \hline \end{array}$$

$$\begin{array}{r} 3) \quad 803 \\ - 721 \\ \hline \end{array}$$

$$\begin{array}{r} 4) \quad 504 \\ - 72 \\ \hline \end{array}$$

$$\begin{array}{r} 5) \quad 806 \\ - 805 \\ \hline \end{array}$$

$$\begin{array}{r} 6) \quad 509 \\ - 180 \\ \hline \end{array}$$

$$\begin{array}{r} 7) \quad 605 \\ - 16 \\ \hline \end{array}$$

$$\begin{array}{r} 8) \quad 309 \\ - 216 \\ \hline \end{array}$$

$$\begin{array}{r} 9) \quad 405 \\ - 22 \\ \hline \end{array}$$

$$\begin{array}{r} 10) \quad 102 \\ - 16 \\ \hline \end{array}$$

$$\begin{array}{r} 11) \quad 505 \\ - 483 \\ \hline \end{array}$$

$$\begin{array}{r} 12) \quad 908 \\ - 439 \\ \hline \end{array}$$

$$\begin{array}{r} 13) \quad 701 \\ - 260 \\ \hline \end{array}$$

$$\begin{array}{r} 14) \quad 402 \\ - 230 \\ \hline \end{array}$$

$$\begin{array}{r} 15) \quad 909 \\ - 510 \\ \hline \end{array}$$

$$\begin{array}{r} 16) \quad 909 \\ - 27 \\ \hline \end{array}$$

$$\begin{array}{r} 17) \quad 107 \\ - 10 \\ \hline \end{array}$$

$$\begin{array}{r} 18) \quad 906 \\ - 21 \\ \hline \end{array}$$

$$\begin{array}{r} 19) \quad 906 \\ - 397 \\ \hline \end{array}$$

$$\begin{array}{r} 20) \quad 902 \\ - 179 \\ \hline \end{array}$$

1. \_\_\_\_\_

2. \_\_\_\_\_

3. \_\_\_\_\_

4. \_\_\_\_\_

5. \_\_\_\_\_

6. \_\_\_\_\_

7. \_\_\_\_\_

8. \_\_\_\_\_

9. \_\_\_\_\_

10. \_\_\_\_\_

11. \_\_\_\_\_

12. \_\_\_\_\_

13. \_\_\_\_\_

14. \_\_\_\_\_

15. \_\_\_\_\_

16. \_\_\_\_\_

17. \_\_\_\_\_

18. \_\_\_\_\_

19. \_\_\_\_\_

20. \_\_\_\_\_



Use subtraction to solve the following problems.

Answers

$$\begin{array}{r} 1) \quad 802 \\ - 126 \\ \hline 676 \end{array}$$

$$\begin{array}{r} 2) \quad 501 \\ - 202 \\ \hline 299 \end{array}$$

$$\begin{array}{r} 3) \quad 803 \\ - 721 \\ \hline 82 \end{array}$$

$$\begin{array}{r} 4) \quad 504 \\ - 72 \\ \hline 432 \end{array}$$

$$\begin{array}{r} 5) \quad 806 \\ - 805 \\ \hline 1 \end{array}$$

$$\begin{array}{r} 6) \quad 509 \\ - 180 \\ \hline 329 \end{array}$$

$$\begin{array}{r} 7) \quad 605 \\ - 16 \\ \hline 589 \end{array}$$

$$\begin{array}{r} 8) \quad 309 \\ - 216 \\ \hline 93 \end{array}$$

$$\begin{array}{r} 9) \quad 405 \\ - 22 \\ \hline 383 \end{array}$$

$$\begin{array}{r} 10) \quad 102 \\ - 16 \\ \hline 86 \end{array}$$

$$\begin{array}{r} 11) \quad 505 \\ - 483 \\ \hline 22 \end{array}$$

$$\begin{array}{r} 12) \quad 908 \\ - 439 \\ \hline 469 \end{array}$$

$$\begin{array}{r} 13) \quad 701 \\ - 260 \\ \hline 441 \end{array}$$

$$\begin{array}{r} 14) \quad 402 \\ - 230 \\ \hline 172 \end{array}$$

$$\begin{array}{r} 15) \quad 909 \\ - 510 \\ \hline 399 \end{array}$$

$$\begin{array}{r} 16) \quad 909 \\ - 27 \\ \hline 882 \end{array}$$

$$\begin{array}{r} 17) \quad 107 \\ - 10 \\ \hline 97 \end{array}$$

$$\begin{array}{r} 18) \quad 906 \\ - 21 \\ \hline 885 \end{array}$$

$$\begin{array}{r} 19) \quad 906 \\ - 397 \\ \hline 509 \end{array}$$

$$\begin{array}{r} 20) \quad 902 \\ - 179 \\ \hline 723 \end{array}$$

1. 676

2. 299

3. 82

4. 432

5. 1

6. 329

7. 589

8. 93

9. 383

10. 86

11. 22

12. 469

13. 441

14. 172

15. 399

16. 882

17. 97

18. 885

19. 509

20. 723



Use subtraction to solve the following problems.

**Answers**

383	172	299	93	399
1	589	82	432	676
329	86	441	469	22

1) 
$$\begin{array}{r} 802 \\ - 126 \\ \hline \end{array}$$

2) 
$$\begin{array}{r} 501 \\ - 202 \\ \hline \end{array}$$

3) 
$$\begin{array}{r} 803 \\ - 721 \\ \hline \end{array}$$

4) 
$$\begin{array}{r} 504 \\ - 72 \\ \hline \end{array}$$

5) 
$$\begin{array}{r} 806 \\ - 805 \\ \hline \end{array}$$

6) 
$$\begin{array}{r} 509 \\ - 180 \\ \hline \end{array}$$

7) 
$$\begin{array}{r} 605 \\ - 16 \\ \hline \end{array}$$

8) 
$$\begin{array}{r} 309 \\ - 216 \\ \hline \end{array}$$

9) 
$$\begin{array}{r} 405 \\ - 22 \\ \hline \end{array}$$

10) 
$$\begin{array}{r} 102 \\ - 16 \\ \hline \end{array}$$

11) 
$$\begin{array}{r} 505 \\ - 483 \\ \hline \end{array}$$

12) 
$$\begin{array}{r} 908 \\ - 439 \\ \hline \end{array}$$

13) 
$$\begin{array}{r} 701 \\ - 260 \\ \hline \end{array}$$

14) 
$$\begin{array}{r} 402 \\ - 230 \\ \hline \end{array}$$

15) 
$$\begin{array}{r} 909 \\ - 510 \\ \hline \end{array}$$

1. \_\_\_\_\_
2. \_\_\_\_\_
3. \_\_\_\_\_
4. \_\_\_\_\_
5. \_\_\_\_\_
6. \_\_\_\_\_
7. \_\_\_\_\_
8. \_\_\_\_\_
9. \_\_\_\_\_
10. \_\_\_\_\_
11. \_\_\_\_\_
12. \_\_\_\_\_
13. \_\_\_\_\_
14. \_\_\_\_\_
15. \_\_\_\_\_



Use subtraction to solve the following problems.

Answers

$$\begin{array}{r} 1) \quad 904 \\ - 142 \\ \hline \end{array}$$

$$\begin{array}{r} 2) \quad 304 \\ - 127 \\ \hline \end{array}$$

$$\begin{array}{r} 3) \quad 107 \\ - 14 \\ \hline \end{array}$$

$$\begin{array}{r} 4) \quad 208 \\ - 66 \\ \hline \end{array}$$

$$\begin{array}{r} 5) \quad 601 \\ - 26 \\ \hline \end{array}$$

$$\begin{array}{r} 6) \quad 303 \\ - 198 \\ \hline \end{array}$$

$$\begin{array}{r} 7) \quad 101 \\ - 77 \\ \hline \end{array}$$

$$\begin{array}{r} 8) \quad 701 \\ - 381 \\ \hline \end{array}$$

$$\begin{array}{r} 9) \quad 602 \\ - 189 \\ \hline \end{array}$$

$$\begin{array}{r} 10) \quad 301 \\ - 69 \\ \hline \end{array}$$

$$\begin{array}{r} 11) \quad 701 \\ - 393 \\ \hline \end{array}$$

$$\begin{array}{r} 12) \quad 206 \\ - 111 \\ \hline \end{array}$$

$$\begin{array}{r} 13) \quad 206 \\ - 186 \\ \hline \end{array}$$

$$\begin{array}{r} 14) \quad 101 \\ - 99 \\ \hline \end{array}$$

$$\begin{array}{r} 15) \quad 501 \\ - 315 \\ \hline \end{array}$$

$$\begin{array}{r} 16) \quad 306 \\ - 231 \\ \hline \end{array}$$

$$\begin{array}{r} 17) \quad 707 \\ - 591 \\ \hline \end{array}$$

$$\begin{array}{r} 18) \quad 606 \\ - 373 \\ \hline \end{array}$$

$$\begin{array}{r} 19) \quad 906 \\ - 496 \\ \hline \end{array}$$

$$\begin{array}{r} 20) \quad 306 \\ - 253 \\ \hline \end{array}$$

1. \_\_\_\_\_

2. \_\_\_\_\_

3. \_\_\_\_\_

4. \_\_\_\_\_

5. \_\_\_\_\_

6. \_\_\_\_\_

7. \_\_\_\_\_

8. \_\_\_\_\_

9. \_\_\_\_\_

10. \_\_\_\_\_

11. \_\_\_\_\_

12. \_\_\_\_\_

13. \_\_\_\_\_

14. \_\_\_\_\_

15. \_\_\_\_\_

16. \_\_\_\_\_

17. \_\_\_\_\_

18. \_\_\_\_\_

19. \_\_\_\_\_

20. \_\_\_\_\_



Use subtraction to solve the following problems.

Answers

$$\begin{array}{r} 1) \quad 904 \\ - 142 \\ \hline 762 \end{array}$$

$$\begin{array}{r} 2) \quad 304 \\ - 127 \\ \hline 177 \end{array}$$

$$\begin{array}{r} 3) \quad 107 \\ - 14 \\ \hline 93 \end{array}$$

$$\begin{array}{r} 4) \quad 208 \\ - 66 \\ \hline 142 \end{array}$$

$$\begin{array}{r} 5) \quad 601 \\ - 26 \\ \hline 575 \end{array}$$

$$\begin{array}{r} 6) \quad 303 \\ - 198 \\ \hline 105 \end{array}$$

$$\begin{array}{r} 7) \quad 101 \\ - 77 \\ \hline 24 \end{array}$$

$$\begin{array}{r} 8) \quad 701 \\ - 381 \\ \hline 320 \end{array}$$

$$\begin{array}{r} 9) \quad 602 \\ - 189 \\ \hline 413 \end{array}$$

$$\begin{array}{r} 10) \quad 301 \\ - 69 \\ \hline 232 \end{array}$$

$$\begin{array}{r} 11) \quad 701 \\ - 393 \\ \hline 308 \end{array}$$

$$\begin{array}{r} 12) \quad 206 \\ - 111 \\ \hline 95 \end{array}$$

$$\begin{array}{r} 13) \quad 206 \\ - 186 \\ \hline 20 \end{array}$$

$$\begin{array}{r} 14) \quad 101 \\ - 99 \\ \hline 2 \end{array}$$

$$\begin{array}{r} 15) \quad 501 \\ - 315 \\ \hline 186 \end{array}$$

$$\begin{array}{r} 16) \quad 306 \\ - 231 \\ \hline 75 \end{array}$$

$$\begin{array}{r} 17) \quad 707 \\ - 591 \\ \hline 116 \end{array}$$

$$\begin{array}{r} 18) \quad 606 \\ - 373 \\ \hline 233 \end{array}$$

$$\begin{array}{r} 19) \quad 906 \\ - 496 \\ \hline 410 \end{array}$$

$$\begin{array}{r} 20) \quad 306 \\ - 253 \\ \hline 53 \end{array}$$

1. 7622. 1773. 934. 1425. 5756. 1057. 248. 3209. 41310. 23211. 30812. 9513. 2014. 215. 18616. 7517. 11618. 23319. 41020. 53



Use subtraction to solve the following problems.

**Answers**

93

95

20

320

2

105

142

232

308

177

24

762

575

186

413

$$\begin{array}{r} 1) \quad 904 \\ - 142 \\ \hline \end{array}$$

$$\begin{array}{r} 2) \quad 304 \\ - 127 \\ \hline \end{array}$$

$$\begin{array}{r} 3) \quad 107 \\ - 14 \\ \hline \end{array}$$

$$\begin{array}{r} 4) \quad 208 \\ - 66 \\ \hline \end{array}$$

$$\begin{array}{r} 5) \quad 601 \\ - 26 \\ \hline \end{array}$$

$$\begin{array}{r} 6) \quad 303 \\ - 198 \\ \hline \end{array}$$

$$\begin{array}{r} 7) \quad 101 \\ - 77 \\ \hline \end{array}$$

$$\begin{array}{r} 8) \quad 701 \\ - 381 \\ \hline \end{array}$$

$$\begin{array}{r} 9) \quad 602 \\ - 189 \\ \hline \end{array}$$

$$\begin{array}{r} 10) \quad 301 \\ - 69 \\ \hline \end{array}$$

$$\begin{array}{r} 11) \quad 701 \\ - 393 \\ \hline \end{array}$$

$$\begin{array}{r} 12) \quad 206 \\ - 111 \\ \hline \end{array}$$

$$\begin{array}{r} 13) \quad 206 \\ - 186 \\ \hline \end{array}$$

$$\begin{array}{r} 14) \quad 101 \\ - 99 \\ \hline \end{array}$$

$$\begin{array}{r} 15) \quad 501 \\ - 315 \\ \hline \end{array}$$

1. \_\_\_\_\_
2. \_\_\_\_\_
3. \_\_\_\_\_
4. \_\_\_\_\_
5. \_\_\_\_\_
6. \_\_\_\_\_
7. \_\_\_\_\_
8. \_\_\_\_\_
9. \_\_\_\_\_
10. \_\_\_\_\_
11. \_\_\_\_\_
12. \_\_\_\_\_
13. \_\_\_\_\_
14. \_\_\_\_\_
15. \_\_\_\_\_



Use subtraction to solve the following problems.

Answers

$$\begin{array}{r} 1) \quad 509 \\ - 232 \\ \hline \end{array}$$

$$\begin{array}{r} 2) \quad 206 \\ - 129 \\ \hline \end{array}$$

$$\begin{array}{r} 3) \quad 902 \\ - 470 \\ \hline \end{array}$$

$$\begin{array}{r} 4) \quad 207 \\ - 186 \\ \hline \end{array}$$

$$\begin{array}{r} 5) \quad 602 \\ - 340 \\ \hline \end{array}$$

$$\begin{array}{r} 6) \quad 804 \\ - 610 \\ \hline \end{array}$$

$$\begin{array}{r} 7) \quad 805 \\ - 546 \\ \hline \end{array}$$

$$\begin{array}{r} 8) \quad 309 \\ - 125 \\ \hline \end{array}$$

$$\begin{array}{r} 9) \quad 508 \\ - 182 \\ \hline \end{array}$$

$$\begin{array}{r} 10) \quad 504 \\ - 296 \\ \hline \end{array}$$

$$\begin{array}{r} 11) \quad 102 \\ - 38 \\ \hline \end{array}$$

$$\begin{array}{r} 12) \quad 805 \\ - 680 \\ \hline \end{array}$$

$$\begin{array}{r} 13) \quad 408 \\ - 58 \\ \hline \end{array}$$

$$\begin{array}{r} 14) \quad 907 \\ - 873 \\ \hline \end{array}$$

$$\begin{array}{r} 15) \quad 107 \\ - 46 \\ \hline \end{array}$$

$$\begin{array}{r} 16) \quad 106 \\ - 74 \\ \hline \end{array}$$

$$\begin{array}{r} 17) \quad 805 \\ - 736 \\ \hline \end{array}$$

$$\begin{array}{r} 18) \quad 702 \\ - 394 \\ \hline \end{array}$$

$$\begin{array}{r} 19) \quad 906 \\ - 712 \\ \hline \end{array}$$

$$\begin{array}{r} 20) \quad 605 \\ - 241 \\ \hline \end{array}$$

1. \_\_\_\_\_
2. \_\_\_\_\_
3. \_\_\_\_\_
4. \_\_\_\_\_
5. \_\_\_\_\_
6. \_\_\_\_\_
7. \_\_\_\_\_
8. \_\_\_\_\_
9. \_\_\_\_\_
10. \_\_\_\_\_
11. \_\_\_\_\_
12. \_\_\_\_\_
13. \_\_\_\_\_
14. \_\_\_\_\_
15. \_\_\_\_\_
16. \_\_\_\_\_
17. \_\_\_\_\_
18. \_\_\_\_\_
19. \_\_\_\_\_
20. \_\_\_\_\_



Use subtraction to solve the following problems.

Answers

$$\begin{array}{r} 1) \quad 509 \\ - 232 \\ \hline 277 \end{array}$$

$$\begin{array}{r} 2) \quad 206 \\ - 129 \\ \hline 77 \end{array}$$

$$\begin{array}{r} 3) \quad 902 \\ - 470 \\ \hline 432 \end{array}$$

$$\begin{array}{r} 4) \quad 207 \\ - 186 \\ \hline 21 \end{array}$$

$$\begin{array}{r} 5) \quad 602 \\ - 340 \\ \hline 262 \end{array}$$

$$\begin{array}{r} 6) \quad 804 \\ - 610 \\ \hline 194 \end{array}$$

$$\begin{array}{r} 7) \quad 805 \\ - 546 \\ \hline 259 \end{array}$$

$$\begin{array}{r} 8) \quad 309 \\ - 125 \\ \hline 184 \end{array}$$

$$\begin{array}{r} 9) \quad 508 \\ - 182 \\ \hline 326 \end{array}$$

$$\begin{array}{r} 10) \quad 504 \\ - 296 \\ \hline 208 \end{array}$$

$$\begin{array}{r} 11) \quad 102 \\ - 38 \\ \hline 64 \end{array}$$

$$\begin{array}{r} 12) \quad 805 \\ - 680 \\ \hline 125 \end{array}$$

$$\begin{array}{r} 13) \quad 408 \\ - 58 \\ \hline 350 \end{array}$$

$$\begin{array}{r} 14) \quad 907 \\ - 873 \\ \hline 34 \end{array}$$

$$\begin{array}{r} 15) \quad 107 \\ - 46 \\ \hline 61 \end{array}$$

$$\begin{array}{r} 16) \quad 106 \\ - 74 \\ \hline 32 \end{array}$$

$$\begin{array}{r} 17) \quad 805 \\ - 736 \\ \hline 69 \end{array}$$

$$\begin{array}{r} 18) \quad 702 \\ - 394 \\ \hline 308 \end{array}$$

$$\begin{array}{r} 19) \quad 906 \\ - 712 \\ \hline 194 \end{array}$$

$$\begin{array}{r} 20) \quad 605 \\ - 241 \\ \hline 364 \end{array}$$

1. 2772. 773. 4324. 215. 2626. 1947. 2598. 1849. 32610. 20811. 6412. 12513. 35014. 3415. 6116. 3217. 6918. 30819. 19420. 364





Use subtraction to solve the following problems.

**Answers**

|     |     |    |     |     |
|-----|-----|----|-----|-----|
| 259 | 184 | 34 | 194 | 21  |
| 125 | 350 | 77 | 277 | 208 |
| 326 | 64  | 61 | 262 | 432 |

$$\begin{array}{r} 1) \quad 509 \\ - 232 \\ \hline \end{array}$$

$$\begin{array}{r} 2) \quad 206 \\ - 129 \\ \hline \end{array}$$

$$\begin{array}{r} 3) \quad 902 \\ - 470 \\ \hline \end{array}$$

$$\begin{array}{r} 4) \quad 207 \\ - 186 \\ \hline \end{array}$$

$$\begin{array}{r} 5) \quad 602 \\ - 340 \\ \hline \end{array}$$

$$\begin{array}{r} 6) \quad 804 \\ - 610 \\ \hline \end{array}$$

$$\begin{array}{r} 7) \quad 805 \\ - 546 \\ \hline \end{array}$$

$$\begin{array}{r} 8) \quad 309 \\ - 125 \\ \hline \end{array}$$

$$\begin{array}{r} 9) \quad 508 \\ - 182 \\ \hline \end{array}$$

$$\begin{array}{r} 10) \quad 504 \\ - 296 \\ \hline \end{array}$$

$$\begin{array}{r} 11) \quad 102 \\ - 38 \\ \hline \end{array}$$

$$\begin{array}{r} 12) \quad 805 \\ - 680 \\ \hline \end{array}$$

$$\begin{array}{r} 13) \quad 408 \\ - 58 \\ \hline \end{array}$$

$$\begin{array}{r} 14) \quad 907 \\ - 873 \\ \hline \end{array}$$

$$\begin{array}{r} 15) \quad 107 \\ - 46 \\ \hline \end{array}$$

1. \_\_\_\_\_
2. \_\_\_\_\_
3. \_\_\_\_\_
4. \_\_\_\_\_
5. \_\_\_\_\_
6. \_\_\_\_\_
7. \_\_\_\_\_
8. \_\_\_\_\_
9. \_\_\_\_\_
10. \_\_\_\_\_
11. \_\_\_\_\_
12. \_\_\_\_\_
13. \_\_\_\_\_
14. \_\_\_\_\_
15. \_\_\_\_\_



Use subtraction to solve the following problems.

Answers

1) 
$$\begin{array}{r} 802 \\ - 597 \\ \hline \end{array}$$

2) 
$$\begin{array}{r} 304 \\ - 86 \\ \hline \end{array}$$

3) 
$$\begin{array}{r} 407 \\ - 300 \\ \hline \end{array}$$

4) 
$$\begin{array}{r} 901 \\ - 648 \\ \hline \end{array}$$

5) 
$$\begin{array}{r} 405 \\ - 76 \\ \hline \end{array}$$

6) 
$$\begin{array}{r} 804 \\ - 759 \\ \hline \end{array}$$

7) 
$$\begin{array}{r} 701 \\ - 518 \\ \hline \end{array}$$

8) 
$$\begin{array}{r} 405 \\ - 69 \\ \hline \end{array}$$

9) 
$$\begin{array}{r} 103 \\ - 83 \\ \hline \end{array}$$

10) 
$$\begin{array}{r} 804 \\ - 242 \\ \hline \end{array}$$

11) 
$$\begin{array}{r} 203 \\ - 34 \\ \hline \end{array}$$

12) 
$$\begin{array}{r} 703 \\ - 331 \\ \hline \end{array}$$

13) 
$$\begin{array}{r} 607 \\ - 568 \\ \hline \end{array}$$

14) 
$$\begin{array}{r} 304 \\ - 87 \\ \hline \end{array}$$

15) 
$$\begin{array}{r} 407 \\ - 198 \\ \hline \end{array}$$

16) 
$$\begin{array}{r} 509 \\ - 463 \\ \hline \end{array}$$

17) 
$$\begin{array}{r} 401 \\ - 179 \\ \hline \end{array}$$

18) 
$$\begin{array}{r} 605 \\ - 527 \\ \hline \end{array}$$

19) 
$$\begin{array}{r} 508 \\ - 277 \\ \hline \end{array}$$

20) 
$$\begin{array}{r} 707 \\ - 142 \\ \hline \end{array}$$

1. \_\_\_\_\_
2. \_\_\_\_\_
3. \_\_\_\_\_
4. \_\_\_\_\_
5. \_\_\_\_\_
6. \_\_\_\_\_
7. \_\_\_\_\_
8. \_\_\_\_\_
9. \_\_\_\_\_
10. \_\_\_\_\_
11. \_\_\_\_\_
12. \_\_\_\_\_
13. \_\_\_\_\_
14. \_\_\_\_\_
15. \_\_\_\_\_
16. \_\_\_\_\_
17. \_\_\_\_\_
18. \_\_\_\_\_
19. \_\_\_\_\_
20. \_\_\_\_\_



Use subtraction to solve the following problems.

Answers

$$\begin{array}{r} 1) \quad 802 \\ - 597 \\ \hline 205 \end{array}$$

$$\begin{array}{r} 2) \quad 304 \\ - 86 \\ \hline 218 \end{array}$$

$$\begin{array}{r} 3) \quad 407 \\ - 300 \\ \hline 107 \end{array}$$

$$\begin{array}{r} 4) \quad 901 \\ - 648 \\ \hline 253 \end{array}$$

$$\begin{array}{r} 5) \quad 405 \\ - 76 \\ \hline 329 \end{array}$$

$$\begin{array}{r} 6) \quad 804 \\ - 759 \\ \hline 45 \end{array}$$

$$\begin{array}{r} 7) \quad 701 \\ - 518 \\ \hline 183 \end{array}$$

$$\begin{array}{r} 8) \quad 405 \\ - 69 \\ \hline 336 \end{array}$$

$$\begin{array}{r} 9) \quad 103 \\ - 83 \\ \hline 20 \end{array}$$

$$\begin{array}{r} 10) \quad 804 \\ - 242 \\ \hline 562 \end{array}$$

$$\begin{array}{r} 11) \quad 203 \\ - 34 \\ \hline 169 \end{array}$$

$$\begin{array}{r} 12) \quad 703 \\ - 331 \\ \hline 372 \end{array}$$

$$\begin{array}{r} 13) \quad 607 \\ - 568 \\ \hline 39 \end{array}$$

$$\begin{array}{r} 14) \quad 304 \\ - 87 \\ \hline 217 \end{array}$$

$$\begin{array}{r} 15) \quad 407 \\ - 198 \\ \hline 209 \end{array}$$

$$\begin{array}{r} 16) \quad 509 \\ - 463 \\ \hline 46 \end{array}$$

$$\begin{array}{r} 17) \quad 401 \\ - 179 \\ \hline 222 \end{array}$$

$$\begin{array}{r} 18) \quad 605 \\ - 527 \\ \hline 78 \end{array}$$

$$\begin{array}{r} 19) \quad 508 \\ - 277 \\ \hline 231 \end{array}$$

$$\begin{array}{r} 20) \quad 707 \\ - 142 \\ \hline 565 \end{array}$$

1. 2052. 2183. 1074. 2535. 3296. 457. 1838. 3369. 2010. 56211. 16912. 37213. 3914. 21715. 20916. 4617. 22218. 7819. 23120. 565



Use subtraction to solve the following problems.

**Answers**

|     |     |     |     |     |
|-----|-----|-----|-----|-----|
| 183 | 253 | 218 | 45  | 39  |
| 329 | 217 | 336 | 107 | 20  |
| 169 | 562 | 205 | 372 | 209 |

1) 
$$\begin{array}{r} 802 \\ - 597 \\ \hline \end{array}$$

2) 
$$\begin{array}{r} 304 \\ - 86 \\ \hline \end{array}$$

3) 
$$\begin{array}{r} 407 \\ - 300 \\ \hline \end{array}$$

4) 
$$\begin{array}{r} 901 \\ - 648 \\ \hline \end{array}$$

5) 
$$\begin{array}{r} 405 \\ - 76 \\ \hline \end{array}$$

6) 
$$\begin{array}{r} 804 \\ - 759 \\ \hline \end{array}$$

7) 
$$\begin{array}{r} 701 \\ - 518 \\ \hline \end{array}$$

8) 
$$\begin{array}{r} 405 \\ - 69 \\ \hline \end{array}$$

9) 
$$\begin{array}{r} 103 \\ - 83 \\ \hline \end{array}$$

10) 
$$\begin{array}{r} 804 \\ - 242 \\ \hline \end{array}$$

11) 
$$\begin{array}{r} 203 \\ - 34 \\ \hline \end{array}$$

12) 
$$\begin{array}{r} 703 \\ - 331 \\ \hline \end{array}$$

13) 
$$\begin{array}{r} 607 \\ - 568 \\ \hline \end{array}$$

14) 
$$\begin{array}{r} 304 \\ - 87 \\ \hline \end{array}$$

15) 
$$\begin{array}{r} 407 \\ - 198 \\ \hline \end{array}$$

1. \_\_\_\_\_
2. \_\_\_\_\_
3. \_\_\_\_\_
4. \_\_\_\_\_
5. \_\_\_\_\_
6. \_\_\_\_\_
7. \_\_\_\_\_
8. \_\_\_\_\_
9. \_\_\_\_\_
10. \_\_\_\_\_
11. \_\_\_\_\_
12. \_\_\_\_\_
13. \_\_\_\_\_
14. \_\_\_\_\_
15. \_\_\_\_\_



Use subtraction to solve the following problems.

Answers

$$\begin{array}{r} 1) \quad 906 \\ - 106 \\ \hline \end{array}$$

$$\begin{array}{r} 2) \quad 306 \\ - 239 \\ \hline \end{array}$$

$$\begin{array}{r} 3) \quad 905 \\ - 214 \\ \hline \end{array}$$

$$\begin{array}{r} 4) \quad 701 \\ - 557 \\ \hline \end{array}$$

$$\begin{array}{r} 5) \quad 205 \\ - 22 \\ \hline \end{array}$$

$$\begin{array}{r} 6) \quad 501 \\ - 157 \\ \hline \end{array}$$

$$\begin{array}{r} 7) \quad 401 \\ - 52 \\ \hline \end{array}$$

$$\begin{array}{r} 8) \quad 406 \\ - 309 \\ \hline \end{array}$$

$$\begin{array}{r} 9) \quad 404 \\ - 42 \\ \hline \end{array}$$

$$\begin{array}{r} 10) \quad 808 \\ - 403 \\ \hline \end{array}$$

$$\begin{array}{r} 11) \quad 205 \\ - 103 \\ \hline \end{array}$$

$$\begin{array}{r} 12) \quad 409 \\ - 395 \\ \hline \end{array}$$

$$\begin{array}{r} 13) \quad 902 \\ - 672 \\ \hline \end{array}$$

$$\begin{array}{r} 14) \quad 606 \\ - 39 \\ \hline \end{array}$$

$$\begin{array}{r} 15) \quad 405 \\ - 337 \\ \hline \end{array}$$

$$\begin{array}{r} 16) \quad 602 \\ - 165 \\ \hline \end{array}$$

$$\begin{array}{r} 17) \quad 804 \\ - 318 \\ \hline \end{array}$$

$$\begin{array}{r} 18) \quad 503 \\ - 138 \\ \hline \end{array}$$

$$\begin{array}{r} 19) \quad 308 \\ - 301 \\ \hline \end{array}$$

$$\begin{array}{r} 20) \quad 401 \\ - 332 \\ \hline \end{array}$$

1. \_\_\_\_\_
2. \_\_\_\_\_
3. \_\_\_\_\_
4. \_\_\_\_\_
5. \_\_\_\_\_
6. \_\_\_\_\_
7. \_\_\_\_\_
8. \_\_\_\_\_
9. \_\_\_\_\_
10. \_\_\_\_\_
11. \_\_\_\_\_
12. \_\_\_\_\_
13. \_\_\_\_\_
14. \_\_\_\_\_
15. \_\_\_\_\_
16. \_\_\_\_\_
17. \_\_\_\_\_
18. \_\_\_\_\_
19. \_\_\_\_\_
20. \_\_\_\_\_



Use subtraction to solve the following problems.

$$\begin{array}{r} 1) \quad 906 \\ - 106 \\ \hline 800 \end{array}$$

$$\begin{array}{r} 2) \quad 306 \\ - 239 \\ \hline 67 \end{array}$$

$$\begin{array}{r} 3) \quad 905 \\ - 214 \\ \hline 691 \end{array}$$

$$\begin{array}{r} 4) \quad 701 \\ - 557 \\ \hline 144 \end{array}$$

$$\begin{array}{r} 5) \quad 205 \\ - 22 \\ \hline 183 \end{array}$$

$$\begin{array}{r} 6) \quad 501 \\ - 157 \\ \hline 344 \end{array}$$

$$\begin{array}{r} 7) \quad 401 \\ - 52 \\ \hline 349 \end{array}$$

$$\begin{array}{r} 8) \quad 406 \\ - 309 \\ \hline 97 \end{array}$$

$$\begin{array}{r} 9) \quad 404 \\ - 42 \\ \hline 362 \end{array}$$

$$\begin{array}{r} 10) \quad 808 \\ - 403 \\ \hline 405 \end{array}$$

$$\begin{array}{r} 11) \quad 205 \\ - 103 \\ \hline 102 \end{array}$$

$$\begin{array}{r} 12) \quad 409 \\ - 395 \\ \hline 14 \end{array}$$

$$\begin{array}{r} 13) \quad 902 \\ - 672 \\ \hline 230 \end{array}$$

$$\begin{array}{r} 14) \quad 606 \\ - 39 \\ \hline 567 \end{array}$$

$$\begin{array}{r} 15) \quad 405 \\ - 337 \\ \hline 68 \end{array}$$

$$\begin{array}{r} 16) \quad 602 \\ - 165 \\ \hline 437 \end{array}$$

$$\begin{array}{r} 17) \quad 804 \\ - 318 \\ \hline 486 \end{array}$$

$$\begin{array}{r} 18) \quad 503 \\ - 138 \\ \hline 365 \end{array}$$

$$\begin{array}{r} 19) \quad 308 \\ - 301 \\ \hline 7 \end{array}$$

$$\begin{array}{r} 20) \quad 401 \\ - 332 \\ \hline 69 \end{array}$$

Answers1. 8002. 673. 6914. 1445. 1836. 3447. 3498. 979. 36210. 40511. 10212. 1413. 23014. 56715. 6816. 43717. 48618. 36519. 720. 69



Use subtraction to solve the following problems.

**Answers**

|     |     |     |     |     |
|-----|-----|-----|-----|-----|
| 230 | 97  | 144 | 800 | 183 |
| 68  | 567 | 362 | 344 | 102 |
| 349 | 67  | 14  | 405 | 691 |

$$\begin{array}{r} 1) \quad 906 \\ - 106 \\ \hline \end{array}$$

$$\begin{array}{r} 2) \quad 306 \\ - 239 \\ \hline \end{array}$$

$$\begin{array}{r} 3) \quad 905 \\ - 214 \\ \hline \end{array}$$

$$\begin{array}{r} 4) \quad 701 \\ - 557 \\ \hline \end{array}$$

$$\begin{array}{r} 5) \quad 205 \\ - 22 \\ \hline \end{array}$$

$$\begin{array}{r} 6) \quad 501 \\ - 157 \\ \hline \end{array}$$

$$\begin{array}{r} 7) \quad 401 \\ - 52 \\ \hline \end{array}$$

$$\begin{array}{r} 8) \quad 406 \\ - 309 \\ \hline \end{array}$$

$$\begin{array}{r} 9) \quad 404 \\ - 42 \\ \hline \end{array}$$

$$\begin{array}{r} 10) \quad 808 \\ - 403 \\ \hline \end{array}$$

$$\begin{array}{r} 11) \quad 205 \\ - 103 \\ \hline \end{array}$$

$$\begin{array}{r} 12) \quad 409 \\ - 395 \\ \hline \end{array}$$

$$\begin{array}{r} 13) \quad 902 \\ - 672 \\ \hline \end{array}$$

$$\begin{array}{r} 14) \quad 606 \\ - 39 \\ \hline \end{array}$$

$$\begin{array}{r} 15) \quad 405 \\ - 337 \\ \hline \end{array}$$

1. \_\_\_\_\_
2. \_\_\_\_\_
3. \_\_\_\_\_
4. \_\_\_\_\_
5. \_\_\_\_\_
6. \_\_\_\_\_
7. \_\_\_\_\_
8. \_\_\_\_\_
9. \_\_\_\_\_
10. \_\_\_\_\_
11. \_\_\_\_\_
12. \_\_\_\_\_
13. \_\_\_\_\_
14. \_\_\_\_\_
15. \_\_\_\_\_



Use subtraction to solve the following problems.

**Answers**

$$\begin{array}{r} 1) \quad 605 \\ - 255 \\ \hline \end{array}$$

$$\begin{array}{r} 2) \quad 609 \\ - 120 \\ \hline \end{array}$$

$$\begin{array}{r} 3) \quad 701 \\ - 219 \\ \hline \end{array}$$

$$\begin{array}{r} 4) \quad 301 \\ - 240 \\ \hline \end{array}$$

$$\begin{array}{r} 5) \quad 307 \\ - 272 \\ \hline \end{array}$$

$$\begin{array}{r} 6) \quad 201 \\ - 42 \\ \hline \end{array}$$

$$\begin{array}{r} 7) \quad 906 \\ - 180 \\ \hline \end{array}$$

$$\begin{array}{r} 8) \quad 309 \\ - 77 \\ \hline \end{array}$$

$$\begin{array}{r} 9) \quad 205 \\ - 85 \\ \hline \end{array}$$

$$\begin{array}{r} 10) \quad 906 \\ - 165 \\ \hline \end{array}$$

$$\begin{array}{r} 11) \quad 305 \\ - 183 \\ \hline \end{array}$$

$$\begin{array}{r} 12) \quad 303 \\ - 218 \\ \hline \end{array}$$

$$\begin{array}{r} 13) \quad 405 \\ - 314 \\ \hline \end{array}$$

$$\begin{array}{r} 14) \quad 103 \\ - 42 \\ \hline \end{array}$$

$$\begin{array}{r} 15) \quad 104 \\ - 68 \\ \hline \end{array}$$

$$\begin{array}{r} 16) \quad 701 \\ - 406 \\ \hline \end{array}$$

$$\begin{array}{r} 17) \quad 109 \\ - 51 \\ \hline \end{array}$$

$$\begin{array}{r} 18) \quad 401 \\ - 194 \\ \hline \end{array}$$

$$\begin{array}{r} 19) \quad 503 \\ - 402 \\ \hline \end{array}$$

$$\begin{array}{r} 20) \quad 601 \\ - 556 \\ \hline \end{array}$$

1. \_\_\_\_\_
2. \_\_\_\_\_
3. \_\_\_\_\_
4. \_\_\_\_\_
5. \_\_\_\_\_
6. \_\_\_\_\_
7. \_\_\_\_\_
8. \_\_\_\_\_
9. \_\_\_\_\_
10. \_\_\_\_\_
11. \_\_\_\_\_
12. \_\_\_\_\_
13. \_\_\_\_\_
14. \_\_\_\_\_
15. \_\_\_\_\_
16. \_\_\_\_\_
17. \_\_\_\_\_
18. \_\_\_\_\_
19. \_\_\_\_\_
20. \_\_\_\_\_





Use subtraction to solve the following problems.

Answers

$$\begin{array}{r} 1) \quad 605 \\ - 255 \\ \hline 350 \end{array}$$

$$\begin{array}{r} 2) \quad 609 \\ - 120 \\ \hline 489 \end{array}$$

$$\begin{array}{r} 3) \quad 701 \\ - 219 \\ \hline 482 \end{array}$$

$$\begin{array}{r} 4) \quad 301 \\ - 240 \\ \hline 61 \end{array}$$

$$\begin{array}{r} 5) \quad 307 \\ - 272 \\ \hline 35 \end{array}$$

$$\begin{array}{r} 6) \quad 201 \\ - 42 \\ \hline 159 \end{array}$$

$$\begin{array}{r} 7) \quad 906 \\ - 180 \\ \hline 726 \end{array}$$

$$\begin{array}{r} 8) \quad 309 \\ - 77 \\ \hline 232 \end{array}$$

$$\begin{array}{r} 9) \quad 205 \\ - 85 \\ \hline 120 \end{array}$$

$$\begin{array}{r} 10) \quad 906 \\ - 165 \\ \hline 741 \end{array}$$

$$\begin{array}{r} 11) \quad 305 \\ - 183 \\ \hline 122 \end{array}$$

$$\begin{array}{r} 12) \quad 303 \\ - 218 \\ \hline 85 \end{array}$$

$$\begin{array}{r} 13) \quad 405 \\ - 314 \\ \hline 91 \end{array}$$

$$\begin{array}{r} 14) \quad 103 \\ - 42 \\ \hline 61 \end{array}$$

$$\begin{array}{r} 15) \quad 104 \\ - 68 \\ \hline 36 \end{array}$$

$$\begin{array}{r} 16) \quad 701 \\ - 406 \\ \hline 295 \end{array}$$

$$\begin{array}{r} 17) \quad 109 \\ - 51 \\ \hline 58 \end{array}$$

$$\begin{array}{r} 18) \quad 401 \\ - 194 \\ \hline 207 \end{array}$$

$$\begin{array}{r} 19) \quad 503 \\ - 402 \\ \hline 101 \end{array}$$

$$\begin{array}{r} 20) \quad 601 \\ - 556 \\ \hline 45 \end{array}$$

1. 3502. 4893. 4824. 615. 356. 1597. 7268. 2329. 12010. 74111. 12212. 8513. 9114. 6115. 3616. 29517. 5818. 20719. 10120. 45



Use subtraction to solve the following problems.

**Answers**

|     |     |     |     |     |
|-----|-----|-----|-----|-----|
| 61  | 85  | 350 | 122 | 35  |
| 91  | 741 | 120 | 482 | 36  |
| 232 | 159 | 489 | 61  | 726 |

$$\begin{array}{r} 1) \quad 605 \\ - 255 \\ \hline \end{array}$$

$$\begin{array}{r} 2) \quad 609 \\ - 120 \\ \hline \end{array}$$

$$\begin{array}{r} 3) \quad 701 \\ - 219 \\ \hline \end{array}$$

$$\begin{array}{r} 4) \quad 301 \\ - 240 \\ \hline \end{array}$$

$$\begin{array}{r} 5) \quad 307 \\ - 272 \\ \hline \end{array}$$

$$\begin{array}{r} 6) \quad 201 \\ - 42 \\ \hline \end{array}$$

$$\begin{array}{r} 7) \quad 906 \\ - 180 \\ \hline \end{array}$$

$$\begin{array}{r} 8) \quad 309 \\ - 77 \\ \hline \end{array}$$

$$\begin{array}{r} 9) \quad 205 \\ - 85 \\ \hline \end{array}$$

$$\begin{array}{r} 10) \quad 906 \\ - 165 \\ \hline \end{array}$$

$$\begin{array}{r} 11) \quad 305 \\ - 183 \\ \hline \end{array}$$

$$\begin{array}{r} 12) \quad 303 \\ - 218 \\ \hline \end{array}$$

$$\begin{array}{r} 13) \quad 405 \\ - 314 \\ \hline \end{array}$$

$$\begin{array}{r} 14) \quad 103 \\ - 42 \\ \hline \end{array}$$

$$\begin{array}{r} 15) \quad 104 \\ - 68 \\ \hline \end{array}$$

1. \_\_\_\_\_
2. \_\_\_\_\_
3. \_\_\_\_\_
4. \_\_\_\_\_
5. \_\_\_\_\_
6. \_\_\_\_\_
7. \_\_\_\_\_
8. \_\_\_\_\_
9. \_\_\_\_\_
10. \_\_\_\_\_
11. \_\_\_\_\_
12. \_\_\_\_\_
13. \_\_\_\_\_
14. \_\_\_\_\_
15. \_\_\_\_\_



Use subtraction to solve the following problems.

Answers

$$\begin{array}{r} 1) \quad 705 \\ - 491 \\ \hline \end{array}$$

$$\begin{array}{r} 2) \quad 507 \\ - 462 \\ \hline \end{array}$$

$$\begin{array}{r} 3) \quad 401 \\ - 286 \\ \hline \end{array}$$

$$\begin{array}{r} 4) \quad 907 \\ - 366 \\ \hline \end{array}$$

$$\begin{array}{r} 5) \quad 701 \\ - 521 \\ \hline \end{array}$$

$$\begin{array}{r} 6) \quad 809 \\ - 705 \\ \hline \end{array}$$

$$\begin{array}{r} 7) \quad 207 \\ - 53 \\ \hline \end{array}$$

$$\begin{array}{r} 8) \quad 708 \\ - 354 \\ \hline \end{array}$$

$$\begin{array}{r} 9) \quad 208 \\ - 68 \\ \hline \end{array}$$

$$\begin{array}{r} 10) \quad 808 \\ - 722 \\ \hline \end{array}$$

$$\begin{array}{r} 11) \quad 503 \\ - 285 \\ \hline \end{array}$$

$$\begin{array}{r} 12) \quad 606 \\ - 413 \\ \hline \end{array}$$

$$\begin{array}{r} 13) \quad 202 \\ - 13 \\ \hline \end{array}$$

$$\begin{array}{r} 14) \quad 701 \\ - 117 \\ \hline \end{array}$$

$$\begin{array}{r} 15) \quad 705 \\ - 293 \\ \hline \end{array}$$

$$\begin{array}{r} 16) \quad 705 \\ - 601 \\ \hline \end{array}$$

$$\begin{array}{r} 17) \quad 402 \\ - 66 \\ \hline \end{array}$$

$$\begin{array}{r} 18) \quad 408 \\ - 136 \\ \hline \end{array}$$

$$\begin{array}{r} 19) \quad 905 \\ - 845 \\ \hline \end{array}$$

$$\begin{array}{r} 20) \quad 502 \\ - 317 \\ \hline \end{array}$$

1. \_\_\_\_\_
2. \_\_\_\_\_
3. \_\_\_\_\_
4. \_\_\_\_\_
5. \_\_\_\_\_
6. \_\_\_\_\_
7. \_\_\_\_\_
8. \_\_\_\_\_
9. \_\_\_\_\_
10. \_\_\_\_\_
11. \_\_\_\_\_
12. \_\_\_\_\_
13. \_\_\_\_\_
14. \_\_\_\_\_
15. \_\_\_\_\_
16. \_\_\_\_\_
17. \_\_\_\_\_
18. \_\_\_\_\_
19. \_\_\_\_\_
20. \_\_\_\_\_



Use subtraction to solve the following problems.

Answers

$$\begin{array}{r} 1) \quad 705 \\ - 491 \\ \hline 214 \end{array}$$

$$\begin{array}{r} 2) \quad 507 \\ - 462 \\ \hline 45 \end{array}$$

$$\begin{array}{r} 3) \quad 401 \\ - 286 \\ \hline 115 \end{array}$$

$$\begin{array}{r} 4) \quad 907 \\ - 366 \\ \hline 541 \end{array}$$

$$\begin{array}{r} 5) \quad 701 \\ - 521 \\ \hline 180 \end{array}$$

$$\begin{array}{r} 6) \quad 809 \\ - 705 \\ \hline 104 \end{array}$$

$$\begin{array}{r} 7) \quad 207 \\ - 53 \\ \hline 154 \end{array}$$

$$\begin{array}{r} 8) \quad 708 \\ - 354 \\ \hline 354 \end{array}$$

$$\begin{array}{r} 9) \quad 208 \\ - 68 \\ \hline 140 \end{array}$$

$$\begin{array}{r} 10) \quad 808 \\ - 722 \\ \hline 86 \end{array}$$

$$\begin{array}{r} 11) \quad 503 \\ - 285 \\ \hline 218 \end{array}$$

$$\begin{array}{r} 12) \quad 606 \\ - 413 \\ \hline 193 \end{array}$$

$$\begin{array}{r} 13) \quad 202 \\ - 13 \\ \hline 189 \end{array}$$

$$\begin{array}{r} 14) \quad 701 \\ - 117 \\ \hline 584 \end{array}$$

$$\begin{array}{r} 15) \quad 705 \\ - 293 \\ \hline 412 \end{array}$$

$$\begin{array}{r} 16) \quad 705 \\ - 601 \\ \hline 104 \end{array}$$

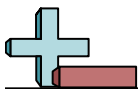
$$\begin{array}{r} 17) \quad 402 \\ - 66 \\ \hline 336 \end{array}$$

$$\begin{array}{r} 18) \quad 408 \\ - 136 \\ \hline 272 \end{array}$$

$$\begin{array}{r} 19) \quad 905 \\ - 845 \\ \hline 60 \end{array}$$

$$\begin{array}{r} 20) \quad 502 \\ - 317 \\ \hline 185 \end{array}$$

1. 2142. 453. 1154. 5415. 1806. 1047. 1548. 3549. 14010. 8611. 21812. 19313. 18914. 58415. 41216. 10417. 33618. 27219. 6020. 185



Use subtraction to solve the following problems.

**Answers**

|     |     |     |     |     |
|-----|-----|-----|-----|-----|
| 189 | 86  | 104 | 541 | 45  |
| 354 | 193 | 584 | 140 | 180 |
| 214 | 412 | 218 | 154 | 115 |

$$\begin{array}{r} 1) \quad 705 \\ - 491 \\ \hline \end{array}$$

$$\begin{array}{r} 2) \quad 507 \\ - 462 \\ \hline \end{array}$$

$$\begin{array}{r} 3) \quad 401 \\ - 286 \\ \hline \end{array}$$

$$\begin{array}{r} 4) \quad 907 \\ - 366 \\ \hline \end{array}$$

$$\begin{array}{r} 5) \quad 701 \\ - 521 \\ \hline \end{array}$$

$$\begin{array}{r} 6) \quad 809 \\ - 705 \\ \hline \end{array}$$

$$\begin{array}{r} 7) \quad 207 \\ - 53 \\ \hline \end{array}$$

$$\begin{array}{r} 8) \quad 708 \\ - 354 \\ \hline \end{array}$$

$$\begin{array}{r} 9) \quad 208 \\ - 68 \\ \hline \end{array}$$

$$\begin{array}{r} 10) \quad 808 \\ - 722 \\ \hline \end{array}$$

$$\begin{array}{r} 11) \quad 503 \\ - 285 \\ \hline \end{array}$$

$$\begin{array}{r} 12) \quad 606 \\ - 413 \\ \hline \end{array}$$

$$\begin{array}{r} 13) \quad 202 \\ - 13 \\ \hline \end{array}$$

$$\begin{array}{r} 14) \quad 701 \\ - 117 \\ \hline \end{array}$$

$$\begin{array}{r} 15) \quad 705 \\ - 293 \\ \hline \end{array}$$

1. \_\_\_\_\_
2. \_\_\_\_\_
3. \_\_\_\_\_
4. \_\_\_\_\_
5. \_\_\_\_\_
6. \_\_\_\_\_
7. \_\_\_\_\_
8. \_\_\_\_\_
9. \_\_\_\_\_
10. \_\_\_\_\_
11. \_\_\_\_\_
12. \_\_\_\_\_
13. \_\_\_\_\_
14. \_\_\_\_\_
15. \_\_\_\_\_



Use subtraction to solve the following problems.

Answers

$$\begin{array}{r} 1) \quad 609 \\ - 563 \\ \hline \end{array}$$

$$\begin{array}{r} 2) \quad 203 \\ - 26 \\ \hline \end{array}$$

$$\begin{array}{r} 3) \quad 206 \\ - 156 \\ \hline \end{array}$$

$$\begin{array}{r} 4) \quad 506 \\ - 348 \\ \hline \end{array}$$

$$\begin{array}{r} 5) \quad 603 \\ - 504 \\ \hline \end{array}$$

$$\begin{array}{r} 6) \quad 308 \\ - 88 \\ \hline \end{array}$$

$$\begin{array}{r} 7) \quad 309 \\ - 260 \\ \hline \end{array}$$

$$\begin{array}{r} 8) \quad 107 \\ - 91 \\ \hline \end{array}$$

$$\begin{array}{r} 9) \quad 708 \\ - 262 \\ \hline \end{array}$$

$$\begin{array}{r} 10) \quad 303 \\ - 73 \\ \hline \end{array}$$

$$\begin{array}{r} 11) \quad 608 \\ - 211 \\ \hline \end{array}$$

$$\begin{array}{r} 12) \quad 101 \\ - 100 \\ \hline \end{array}$$

$$\begin{array}{r} 13) \quad 209 \\ - 84 \\ \hline \end{array}$$

$$\begin{array}{r} 14) \quad 408 \\ - 60 \\ \hline \end{array}$$

$$\begin{array}{r} 15) \quad 402 \\ - 134 \\ \hline \end{array}$$

$$\begin{array}{r} 16) \quad 604 \\ - 295 \\ \hline \end{array}$$

$$\begin{array}{r} 17) \quad 403 \\ - 270 \\ \hline \end{array}$$

$$\begin{array}{r} 18) \quad 606 \\ - 113 \\ \hline \end{array}$$

$$\begin{array}{r} 19) \quad 308 \\ - 47 \\ \hline \end{array}$$

$$\begin{array}{r} 20) \quad 701 \\ - 199 \\ \hline \end{array}$$

1. \_\_\_\_\_
2. \_\_\_\_\_
3. \_\_\_\_\_
4. \_\_\_\_\_
5. \_\_\_\_\_
6. \_\_\_\_\_
7. \_\_\_\_\_
8. \_\_\_\_\_
9. \_\_\_\_\_
10. \_\_\_\_\_
11. \_\_\_\_\_
12. \_\_\_\_\_
13. \_\_\_\_\_
14. \_\_\_\_\_
15. \_\_\_\_\_
16. \_\_\_\_\_
17. \_\_\_\_\_
18. \_\_\_\_\_
19. \_\_\_\_\_
20. \_\_\_\_\_



Use subtraction to solve the following problems.

Answers

$$\begin{array}{r} 1) \quad 609 \\ - 563 \\ \hline 46 \end{array}$$

$$\begin{array}{r} 2) \quad 203 \\ - 26 \\ \hline 177 \end{array}$$

$$\begin{array}{r} 3) \quad 206 \\ - 156 \\ \hline 50 \end{array}$$

$$\begin{array}{r} 4) \quad 506 \\ - 348 \\ \hline 158 \end{array}$$

$$\begin{array}{r} 5) \quad 603 \\ - 504 \\ \hline 99 \end{array}$$

$$\begin{array}{r} 6) \quad 308 \\ - 88 \\ \hline 220 \end{array}$$

$$\begin{array}{r} 7) \quad 309 \\ - 260 \\ \hline 49 \end{array}$$

$$\begin{array}{r} 8) \quad 107 \\ - 91 \\ \hline 16 \end{array}$$

$$\begin{array}{r} 9) \quad 708 \\ - 262 \\ \hline 446 \end{array}$$

$$\begin{array}{r} 10) \quad 303 \\ - 73 \\ \hline 230 \end{array}$$

$$\begin{array}{r} 11) \quad 608 \\ - 211 \\ \hline 397 \end{array}$$

$$\begin{array}{r} 12) \quad 101 \\ - 100 \\ \hline 1 \end{array}$$

$$\begin{array}{r} 13) \quad 209 \\ - 84 \\ \hline 125 \end{array}$$

$$\begin{array}{r} 14) \quad 408 \\ - 60 \\ \hline 348 \end{array}$$

$$\begin{array}{r} 15) \quad 402 \\ - 134 \\ \hline 268 \end{array}$$

$$\begin{array}{r} 16) \quad 604 \\ - 295 \\ \hline 309 \end{array}$$

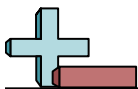
$$\begin{array}{r} 17) \quad 403 \\ - 270 \\ \hline 133 \end{array}$$

$$\begin{array}{r} 18) \quad 606 \\ - 113 \\ \hline 493 \end{array}$$

$$\begin{array}{r} 19) \quad 308 \\ - 47 \\ \hline 261 \end{array}$$

$$\begin{array}{r} 20) \quad 701 \\ - 199 \\ \hline 502 \end{array}$$

1. 462. 1773. 504. 1585. 996. 2207. 498. 169. 44610. 23011. 39712. 113. 12514. 34815. 26816. 30917. 13318. 49319. 26120. 502



Use subtraction to solve the following problems.

**Answers**

|     |     |     |     |     |
|-----|-----|-----|-----|-----|
| 348 | 125 | 158 | 220 | 446 |
| 16  | 50  | 268 | 46  | 49  |
| 397 | 177 | 230 | 99  | 1   |

1) 
$$\begin{array}{r} 609 \\ - 563 \\ \hline \end{array}$$

2) 
$$\begin{array}{r} 203 \\ - 26 \\ \hline \end{array}$$

3) 
$$\begin{array}{r} 206 \\ - 156 \\ \hline \end{array}$$

4) 
$$\begin{array}{r} 506 \\ - 348 \\ \hline \end{array}$$

5) 
$$\begin{array}{r} 603 \\ - 504 \\ \hline \end{array}$$

6) 
$$\begin{array}{r} 308 \\ - 88 \\ \hline \end{array}$$

7) 
$$\begin{array}{r} 309 \\ - 260 \\ \hline \end{array}$$

8) 
$$\begin{array}{r} 107 \\ - 91 \\ \hline \end{array}$$

9) 
$$\begin{array}{r} 708 \\ - 262 \\ \hline \end{array}$$

10) 
$$\begin{array}{r} 303 \\ - 73 \\ \hline \end{array}$$

11) 
$$\begin{array}{r} 608 \\ - 211 \\ \hline \end{array}$$

12) 
$$\begin{array}{r} 101 \\ - 100 \\ \hline \end{array}$$

13) 
$$\begin{array}{r} 209 \\ - 84 \\ \hline \end{array}$$

14) 
$$\begin{array}{r} 408 \\ - 60 \\ \hline \end{array}$$

15) 
$$\begin{array}{r} 402 \\ - 134 \\ \hline \end{array}$$

1. \_\_\_\_\_
2. \_\_\_\_\_
3. \_\_\_\_\_
4. \_\_\_\_\_
5. \_\_\_\_\_
6. \_\_\_\_\_
7. \_\_\_\_\_
8. \_\_\_\_\_
9. \_\_\_\_\_
10. \_\_\_\_\_
11. \_\_\_\_\_
12. \_\_\_\_\_
13. \_\_\_\_\_
14. \_\_\_\_\_
15. \_\_\_\_\_





Use subtraction to solve the following problems.

Answers

$$\begin{array}{r} 1) \quad 701 \\ - 632 \\ \hline \end{array}$$

$$\begin{array}{r} 2) \quad 508 \\ - 360 \\ \hline \end{array}$$

$$\begin{array}{r} 3) \quad 206 \\ - 202 \\ \hline \end{array}$$

$$\begin{array}{r} 4) \quad 108 \\ - 39 \\ \hline \end{array}$$

$$\begin{array}{r} 5) \quad 203 \\ - 202 \\ \hline \end{array}$$

$$\begin{array}{r} 6) \quad 709 \\ - 566 \\ \hline \end{array}$$

$$\begin{array}{r} 7) \quad 908 \\ - 835 \\ \hline \end{array}$$

$$\begin{array}{r} 8) \quad 109 \\ - 73 \\ \hline \end{array}$$

$$\begin{array}{r} 9) \quad 508 \\ - 141 \\ \hline \end{array}$$

$$\begin{array}{r} 10) \quad 205 \\ - 199 \\ \hline \end{array}$$

$$\begin{array}{r} 11) \quad 904 \\ - 566 \\ \hline \end{array}$$

$$\begin{array}{r} 12) \quad 708 \\ - 338 \\ \hline \end{array}$$

$$\begin{array}{r} 13) \quad 409 \\ - 37 \\ \hline \end{array}$$

$$\begin{array}{r} 14) \quad 308 \\ - 160 \\ \hline \end{array}$$

$$\begin{array}{r} 15) \quad 503 \\ - 223 \\ \hline \end{array}$$

$$\begin{array}{r} 16) \quad 605 \\ - 33 \\ \hline \end{array}$$

$$\begin{array}{r} 17) \quad 905 \\ - 632 \\ \hline \end{array}$$

$$\begin{array}{r} 18) \quad 504 \\ - 386 \\ \hline \end{array}$$

$$\begin{array}{r} 19) \quad 204 \\ - 72 \\ \hline \end{array}$$

$$\begin{array}{r} 20) \quad 602 \\ - 118 \\ \hline \end{array}$$

1. \_\_\_\_\_
2. \_\_\_\_\_
3. \_\_\_\_\_
4. \_\_\_\_\_
5. \_\_\_\_\_
6. \_\_\_\_\_
7. \_\_\_\_\_
8. \_\_\_\_\_
9. \_\_\_\_\_
10. \_\_\_\_\_
11. \_\_\_\_\_
12. \_\_\_\_\_
13. \_\_\_\_\_
14. \_\_\_\_\_
15. \_\_\_\_\_
16. \_\_\_\_\_
17. \_\_\_\_\_
18. \_\_\_\_\_
19. \_\_\_\_\_
20. \_\_\_\_\_



Use subtraction to solve the following problems.

Answers

$$\begin{array}{r} 1) \quad 701 \\ - 632 \\ \hline 69 \end{array}$$

$$\begin{array}{r} 2) \quad 508 \\ - 360 \\ \hline 148 \end{array}$$

$$\begin{array}{r} 3) \quad 206 \\ - 202 \\ \hline 4 \end{array}$$

$$\begin{array}{r} 4) \quad 108 \\ - 39 \\ \hline 69 \end{array}$$

$$\begin{array}{r} 5) \quad 203 \\ - 202 \\ \hline 1 \end{array}$$

$$\begin{array}{r} 6) \quad 709 \\ - 566 \\ \hline 143 \end{array}$$

$$\begin{array}{r} 7) \quad 908 \\ - 835 \\ \hline 73 \end{array}$$

$$\begin{array}{r} 8) \quad 109 \\ - 73 \\ \hline 36 \end{array}$$

$$\begin{array}{r} 9) \quad 508 \\ - 141 \\ \hline 367 \end{array}$$

$$\begin{array}{r} 10) \quad 205 \\ - 199 \\ \hline 6 \end{array}$$

$$\begin{array}{r} 11) \quad 904 \\ - 566 \\ \hline 338 \end{array}$$

$$\begin{array}{r} 12) \quad 708 \\ - 338 \\ \hline 370 \end{array}$$

$$\begin{array}{r} 13) \quad 409 \\ - 37 \\ \hline 372 \end{array}$$

$$\begin{array}{r} 14) \quad 308 \\ - 160 \\ \hline 148 \end{array}$$

$$\begin{array}{r} 15) \quad 503 \\ - 223 \\ \hline 280 \end{array}$$

$$\begin{array}{r} 16) \quad 605 \\ - 33 \\ \hline 572 \end{array}$$

$$\begin{array}{r} 17) \quad 905 \\ - 632 \\ \hline 273 \end{array}$$

$$\begin{array}{r} 18) \quad 504 \\ - 386 \\ \hline 118 \end{array}$$

$$\begin{array}{r} 19) \quad 204 \\ - 72 \\ \hline 132 \end{array}$$

$$\begin{array}{r} 20) \quad 602 \\ - 118 \\ \hline 484 \end{array}$$

1. 692. 1483. 44. 695. 16. 1437. 738. 369. 36710. 611. 33812. 37013. 37214. 14815. 28016. 57217. 27318. 11819. 13220. 484



Use subtraction to solve the following problems.

**Answers**

|     |     |     |     |     |
|-----|-----|-----|-----|-----|
| 148 | 1   | 372 | 338 | 370 |
| 4   | 6   | 69  | 73  | 36  |
| 148 | 280 | 69  | 367 | 143 |

$$\begin{array}{r} 1) \quad 701 \\ - 632 \\ \hline \end{array}$$

$$\begin{array}{r} 2) \quad 508 \\ - 360 \\ \hline \end{array}$$

$$\begin{array}{r} 3) \quad 206 \\ - 202 \\ \hline \end{array}$$

$$\begin{array}{r} 4) \quad 108 \\ - 39 \\ \hline \end{array}$$

$$\begin{array}{r} 5) \quad 203 \\ - 202 \\ \hline \end{array}$$

$$\begin{array}{r} 6) \quad 709 \\ - 566 \\ \hline \end{array}$$

$$\begin{array}{r} 7) \quad 908 \\ - 835 \\ \hline \end{array}$$

$$\begin{array}{r} 8) \quad 109 \\ - 73 \\ \hline \end{array}$$

$$\begin{array}{r} 9) \quad 508 \\ - 141 \\ \hline \end{array}$$

$$\begin{array}{r} 10) \quad 205 \\ - 199 \\ \hline \end{array}$$

$$\begin{array}{r} 11) \quad 904 \\ - 566 \\ \hline \end{array}$$

$$\begin{array}{r} 12) \quad 708 \\ - 338 \\ \hline \end{array}$$

$$\begin{array}{r} 13) \quad 409 \\ - 37 \\ \hline \end{array}$$

$$\begin{array}{r} 14) \quad 308 \\ - 160 \\ \hline \end{array}$$

$$\begin{array}{r} 15) \quad 503 \\ - 223 \\ \hline \end{array}$$

1. \_\_\_\_\_
2. \_\_\_\_\_
3. \_\_\_\_\_
4. \_\_\_\_\_
5. \_\_\_\_\_
6. \_\_\_\_\_
7. \_\_\_\_\_
8. \_\_\_\_\_
9. \_\_\_\_\_
10. \_\_\_\_\_
11. \_\_\_\_\_
12. \_\_\_\_\_
13. \_\_\_\_\_
14. \_\_\_\_\_
15. \_\_\_\_\_



Use subtraction to solve the following problems.

Answers

$$\begin{array}{r} 1) \quad 908 \\ - 608 \\ \hline \end{array}$$

$$\begin{array}{r} 2) \quad 804 \\ - 103 \\ \hline \end{array}$$

$$\begin{array}{r} 3) \quad 401 \\ - 332 \\ \hline \end{array}$$

$$\begin{array}{r} 4) \quad 703 \\ - 509 \\ \hline \end{array}$$

$$\begin{array}{r} 5) \quad 809 \\ - 399 \\ \hline \end{array}$$

$$\begin{array}{r} 6) \quad 201 \\ - 70 \\ \hline \end{array}$$

$$\begin{array}{r} 7) \quad 308 \\ - 57 \\ \hline \end{array}$$

$$\begin{array}{r} 8) \quad 902 \\ - 62 \\ \hline \end{array}$$

$$\begin{array}{r} 9) \quad 906 \\ - 664 \\ \hline \end{array}$$

$$\begin{array}{r} 10) \quad 107 \\ - 83 \\ \hline \end{array}$$

$$\begin{array}{r} 11) \quad 203 \\ - 104 \\ \hline \end{array}$$

$$\begin{array}{r} 12) \quad 707 \\ - 73 \\ \hline \end{array}$$

$$\begin{array}{r} 13) \quad 101 \\ - 61 \\ \hline \end{array}$$

$$\begin{array}{r} 14) \quad 509 \\ - 299 \\ \hline \end{array}$$

$$\begin{array}{r} 15) \quad 402 \\ - 187 \\ \hline \end{array}$$

$$\begin{array}{r} 16) \quad 608 \\ - 522 \\ \hline \end{array}$$

$$\begin{array}{r} 17) \quad 201 \\ - 98 \\ \hline \end{array}$$

$$\begin{array}{r} 18) \quad 408 \\ - 320 \\ \hline \end{array}$$

$$\begin{array}{r} 19) \quad 107 \\ - 11 \\ \hline \end{array}$$

$$\begin{array}{r} 20) \quad 702 \\ - 167 \\ \hline \end{array}$$

1. \_\_\_\_\_

2. \_\_\_\_\_

3. \_\_\_\_\_

4. \_\_\_\_\_

5. \_\_\_\_\_

6. \_\_\_\_\_

7. \_\_\_\_\_

8. \_\_\_\_\_

9. \_\_\_\_\_

10. \_\_\_\_\_

11. \_\_\_\_\_

12. \_\_\_\_\_

13. \_\_\_\_\_

14. \_\_\_\_\_

15. \_\_\_\_\_

16. \_\_\_\_\_

17. \_\_\_\_\_

18. \_\_\_\_\_

19. \_\_\_\_\_

20. \_\_\_\_\_



Use subtraction to solve the following problems.

Answers

$$\begin{array}{r} 1) \quad 908 \\ - 608 \\ \hline 300 \end{array}$$

$$\begin{array}{r} 2) \quad 804 \\ - 103 \\ \hline 701 \end{array}$$

$$\begin{array}{r} 3) \quad 401 \\ - 332 \\ \hline 69 \end{array}$$

$$\begin{array}{r} 4) \quad 703 \\ - 509 \\ \hline 194 \end{array}$$

$$\begin{array}{r} 5) \quad 809 \\ - 399 \\ \hline 410 \end{array}$$

$$\begin{array}{r} 6) \quad 201 \\ - 70 \\ \hline 131 \end{array}$$

$$\begin{array}{r} 7) \quad 308 \\ - 57 \\ \hline 251 \end{array}$$

$$\begin{array}{r} 8) \quad 902 \\ - 62 \\ \hline 840 \end{array}$$

$$\begin{array}{r} 9) \quad 906 \\ - 664 \\ \hline 242 \end{array}$$

$$\begin{array}{r} 10) \quad 107 \\ - 83 \\ \hline 24 \end{array}$$

$$\begin{array}{r} 11) \quad 203 \\ - 104 \\ \hline 99 \end{array}$$

$$\begin{array}{r} 12) \quad 707 \\ - 73 \\ \hline 634 \end{array}$$

$$\begin{array}{r} 13) \quad 101 \\ - 61 \\ \hline 40 \end{array}$$

$$\begin{array}{r} 14) \quad 509 \\ - 299 \\ \hline 210 \end{array}$$

$$\begin{array}{r} 15) \quad 402 \\ - 187 \\ \hline 215 \end{array}$$

$$\begin{array}{r} 16) \quad 608 \\ - 522 \\ \hline 86 \end{array}$$

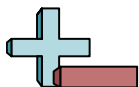
$$\begin{array}{r} 17) \quad 201 \\ - 98 \\ \hline 103 \end{array}$$

$$\begin{array}{r} 18) \quad 408 \\ - 320 \\ \hline 88 \end{array}$$

$$\begin{array}{r} 19) \quad 107 \\ - 11 \\ \hline 96 \end{array}$$

$$\begin{array}{r} 20) \quad 702 \\ - 167 \\ \hline 535 \end{array}$$

1. 3002. 7013. 694. 1945. 4106. 1317. 2518. 8409. 24210. 2411. 9912. 63413. 4014. 21015. 21516. 8617. 10318. 8819. 9620. 535



Use subtraction to solve the following problems.

**Answers**

|     |     |     |     |     |
|-----|-----|-----|-----|-----|
| 300 | 251 | 40  | 24  | 634 |
| 210 | 840 | 701 | 131 | 69  |
| 215 | 242 | 410 | 99  | 194 |

$$\begin{array}{r} 1) \quad 908 \\ - 608 \\ \hline \end{array}$$

$$\begin{array}{r} 2) \quad 804 \\ - 103 \\ \hline \end{array}$$

$$\begin{array}{r} 3) \quad 401 \\ - 332 \\ \hline \end{array}$$

$$\begin{array}{r} 4) \quad 703 \\ - 509 \\ \hline \end{array}$$

$$\begin{array}{r} 5) \quad 809 \\ - 399 \\ \hline \end{array}$$

$$\begin{array}{r} 6) \quad 201 \\ - 70 \\ \hline \end{array}$$

$$\begin{array}{r} 7) \quad 308 \\ - 57 \\ \hline \end{array}$$

$$\begin{array}{r} 8) \quad 902 \\ - 62 \\ \hline \end{array}$$

$$\begin{array}{r} 9) \quad 906 \\ - 664 \\ \hline \end{array}$$

$$\begin{array}{r} 10) \quad 107 \\ - 83 \\ \hline \end{array}$$

$$\begin{array}{r} 11) \quad 203 \\ - 104 \\ \hline \end{array}$$

$$\begin{array}{r} 12) \quad 707 \\ - 73 \\ \hline \end{array}$$

$$\begin{array}{r} 13) \quad 101 \\ - 61 \\ \hline \end{array}$$

$$\begin{array}{r} 14) \quad 509 \\ - 299 \\ \hline \end{array}$$

$$\begin{array}{r} 15) \quad 402 \\ - 187 \\ \hline \end{array}$$

1. \_\_\_\_\_
2. \_\_\_\_\_
3. \_\_\_\_\_
4. \_\_\_\_\_
5. \_\_\_\_\_
6. \_\_\_\_\_
7. \_\_\_\_\_
8. \_\_\_\_\_
9. \_\_\_\_\_
10. \_\_\_\_\_
11. \_\_\_\_\_
12. \_\_\_\_\_
13. \_\_\_\_\_
14. \_\_\_\_\_
15. \_\_\_\_\_